

Select the correct option to answer every question given below

General Awareness

- 01. Choose the smallest odd number in the number system.**
(A) 0 (B) 1
(C) 2 (D) 3
- 02. Choose the largest planet in our solar system.**
(A) Neptune (B) Mars
(C) Venus (D) Jupiter
- 03. Find the odd one out.**
(A) Hair (B) Pair
(C) Dare (D) Chair
- 04. Chose India's First President.**
(A) Ms. Sonia Gandhi
(B) Dr. Rajendra Prasad
(C) Mr. Narendra Modi
(D) Mr. Jawaharlal Nehru
- 05. Which is the highest mountain peak in the world ?**
(A) Mt. Annapurna (B) Mt. Kilimanjaro
(C) Mt. K2 (D) Mt. Everest
- 06. What is a baby deer called ?**
(A) Joey (B) Lamb
(C) Fawn (D) Whelps

Current Affairs



07. Which is the largest desert India in India ?
(A) The Thar Desert (B) Gobi Desert
(C) Sahara Desert (D) Atacama Desert
08. Choose the celebrity chef best known for his T.V show Khana Khazana.



09. In which direction does the Sun rise ?
(A) North (B) South
(C) West (D) East

Space for Rough Work

10. Which of the following activities should not be done inside the house ?



11. What rules do we need to follow in COVID-19 pandemic condition ?

- (A) Home quarantine is not at all mandatory
- (B) Maintain social distancing
- (C) No masks and face cover to be used
- (D) Cough on each other's face

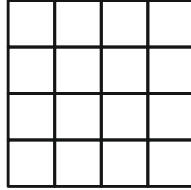
12. Which of the following is a good food habit ?

- (A) Gulping every bite of food
- (B) Eating fresh and covered food
- (C) Eating lots of fries and burgers over home cooked food
- (D) Wasting food and water wherever possible

Space for Rough Work

Critical Thinking

13. Count the number of squares in the given figure.



- (A) 20 (B) 30
(C) 50 (D) 70
14. In a certain code if **SUMMER** is coded as **RUNNER**, then the code for **WINTER** will be ?
- (A) SUITER (B) SUFFER
(C) WALKER (D) VIOUER
15. **Mohan walks 5 km towards the south and then turns to the right. After walking 3 km he turns to the left and walks 5 km. What direction is he facing right now ?**
- (A) North (B) West
(C) East (D) South

KEY

01. B	02. D	03. C	04. B	05. D	06. C	07. A	08. A	09. D	10. C
11. B	12. B	13. B	14. D	15. D					